

Name _____

Date _____

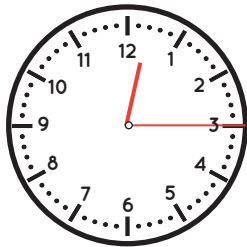
Telling Time

Quarter Hour



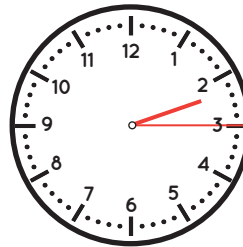
Circle the correct time shown on each clock.

1.



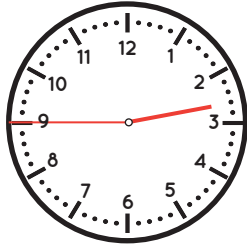
- 3:15
- 12:15
- 12:45

2.



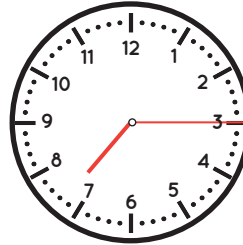
- 1:15
- 2:45
- 2:15

3.



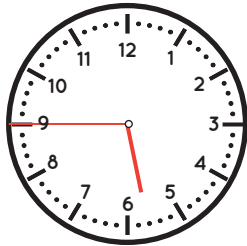
- 2:45
- 9:15
- 3:15

4.



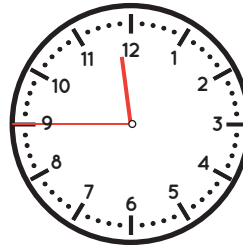
- 3:45
- 7:15
- 7:45

5.



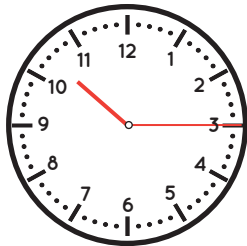
- 5:45
- 9:45
- 6:15

6.



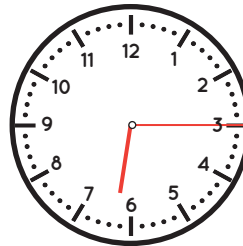
- 11:45
- 9:45
- 12:15

7.



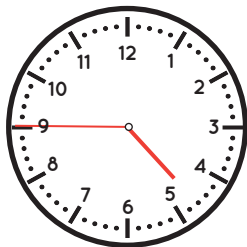
- 3:45
- 10:15
- 10:45

8.



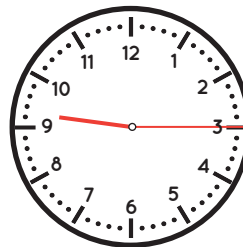
- 3:15
- 6:15
- 3:45

9.



- 4:45
- 5:15
- 5:45

10.



- 3:45
- 9:15
- 3:15